



# LOYOLA COLLEGE (AUTONOMOUS), CHENNAI – 600 034

**B.Voc. DEGREE EXAMINATION – 3D ANIMATION**

**FOURTH SEMESTER – APRIL 2022**

**UEL 4208 – GENERAL ENGLISH IV (ADVANCED) VOC**

Date: 18-06-2022

Dept. No.

Max. : 100 Marks

Time: 09:00 AM - 12:00 NOON

## SECTION A

**Answer ALL the Questions**

**(20 x 1 = 20 Marks)**

1. Read the following part of an email and choose the most appropriate verb form.

I've .....(a).....**looked/been looking** at the list of books we need this term. Some of the them .....(b).....**seem/are seeming** really overpriced! However, I've also .....(c).....**noticed/been noticing** that there's a half-price sale on at one of the bookshops at the moment. OK, so I don't .....(d).....**do /'m not doing** an economics degree, but...I think it would be more cost-effective to buy the books now. The trouble is I've just .....(e).....**paid / been paying** my rent and I can't really afford to. So last night I .....(f).....**thought / was thinking** ....Could I borrow the money until next term? I know you.....(g)..... **spend /'re spending** a lot of money on doing up the house at the moment so I .....(h).....**understand/'m understanding** if it's not possible.

Anyway, I've .....(i).....**finished/been finishing** my coffee now and I .....(j)..... **have / 'm having** a lecture at 11. I'd better be off.

Hope you are both well.

Love

Mon x

2. Fill in the blanks using words given in the box below:

**The Times of India, May 29, 2022**

dumped	litter	life-threatening	transforming	segregating
Fertile lands	collecting	world record	discarding	waste materials

The newly carved out Ranipet district in the state set a world record by .....(a).... 186.9 metric tonnes of plastic waste materials in just three hours. More than 20,000 volunteers from all sections of the society gathered at 7 am on Friday to collect the plastic waste .....(b).... in five municipalities, nine town panchayats and 288 village panchayats in the district.

Earlier, Switzerland held the .....(c)....for collecting 128 metric hree tonnes of plastic .....(d)....in three hours. The district in the process also set three other records earning a mention in the Asian Records Academy, India Records Academy and Tamilan Book of Records.

Let us pledge not to .....(e).... plastic waste. These waste materials not only spoil .....(f)....but are .....(g).... for marine species. This exercise is to create awareness among the public about .....(h).... waste materials and .....(i).... them in an effective manner. The district administration thanks one and all who have pledged to play their role in .....(j).... our Ranipet district and make Ranipet the model district in the state," said Ranipet Collector D

**SECTION B**

**Answer any FIVE of the following in 150 words (5 x 8 = 40 Marks)**

3. Read the following tweet and write what you think about it:


 **Jeffrey Levin** 🇺🇸 @jilevin · May 24

California parents whose children become addicted to social media could soon sue companies: California could soon hold social media companies responsible for harming children who have become addicted to their products, permitting parents.. via NBCNews



nbcnews.com

4. What lessons do you think you can learn from the three women who have bagged the top 3 ranks in the UPSC civil services exam?

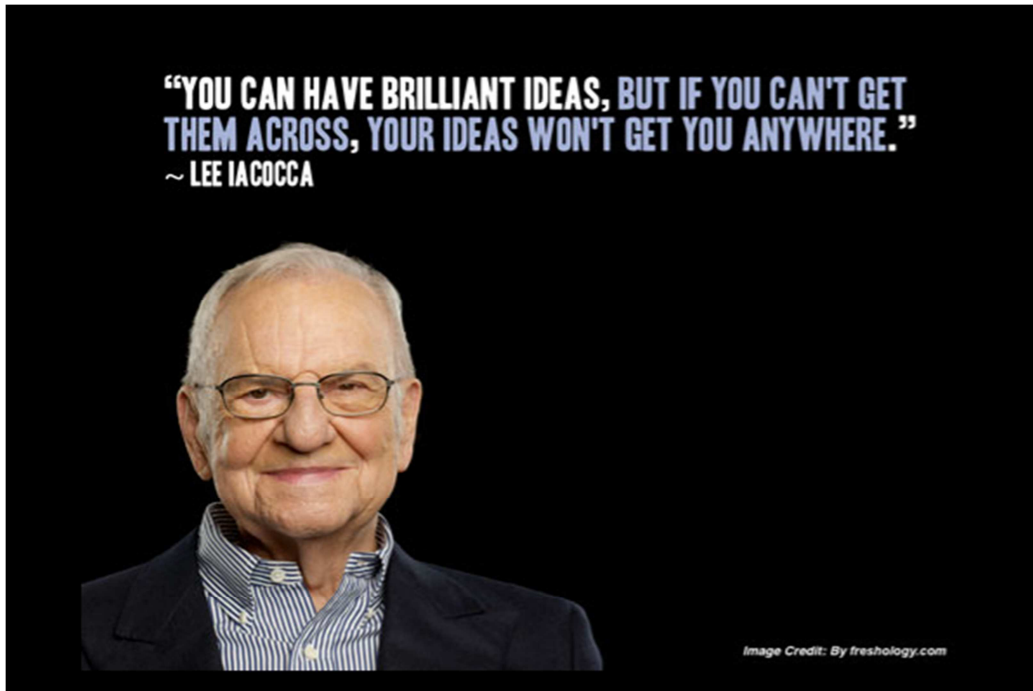
 **Mobassir Gani** @MobssirG · 1h

Congratulations to all those who have cleared this year's #UPSC civil services exam. Very happy to see women bag the top 3 ranks.

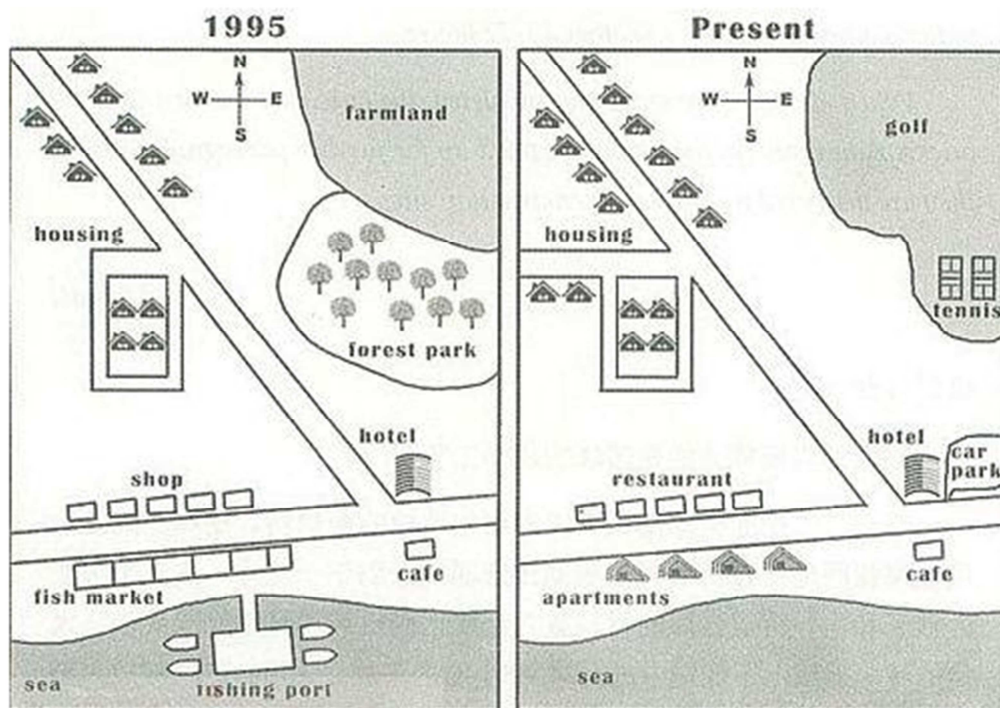
All of you now have a great responsibility of serving India with utmost integrity and commitment. My best wishes for your future careers\_ @MobssirG



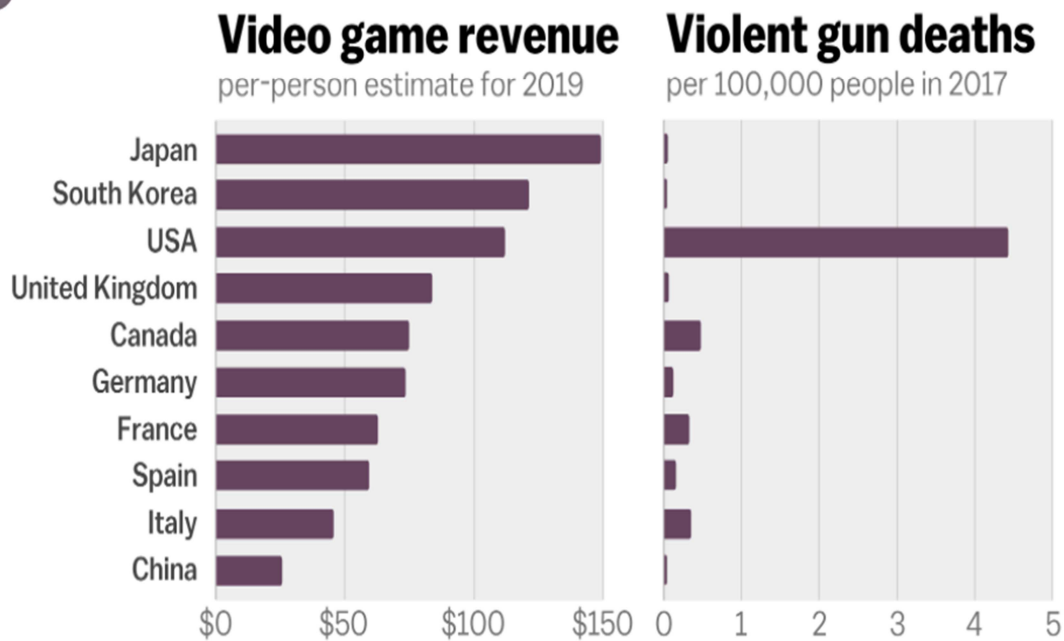
5. If you were to write a book, what would that be on?
6. Think that during your recent flight journey you had interesting conversation with a person from another country. Narrate your experience.
7. "You can have brilliant ideas, but if you can't get them across, your ideas won't get you anywhere." said Lee Iacocca.  
What do you understand from this quote?



8. The two maps below show how a town in Australia looked in 1995 and the changes that have taken place now. Summarize the information by selecting and reporting the main features and make comparisons where relevant.



9. The graph shows the violent gun deaths in the year 2017 in ten countries and the video game revenue for the year 2019. Summarize the information by selecting and reporting the main features and make comparisons where relevant.



Violent gun death data from the Institute for Health Metrics and Evaluation; video game revenue data (which does not include hardware sales) from Newzoo, a gaming analytics company



**SECTION C**

**Answer any TWO of the following in 250 words (2 x 20 = 40 Marks)**

- 10.** Some are of the opinion that age-old customs and traditions should be given up while others say that the customs and traditions should be preserved and passed on to the next generation.  
What is your opinion?  
Give reasons for your answer and include any relevant examples from your knowledge or experience
- 11.** Some people say that it is due to the negligence of the authorities in enforcing strict rules that people tend to cross railway tracks and are run over by trains.  
To what extent do you agree or disagree?  
Give reasons for your answer and include any relevant examples from your knowledge or experience.
- 12.** It is said that advertisements on TV do more harm than good.  
To what extent do you agree or disagree?  
Give reasons for your answer and include any relevant examples from your knowledge or experience.

@@@@@@